


# LE FRAZIONI


- Scrivi la frazione corrispondente alle parti colorate di ogni figura geometrica.



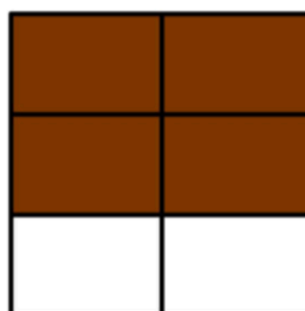
$$\frac{2}{3}$$




$$\frac{\quad}{\quad}$$



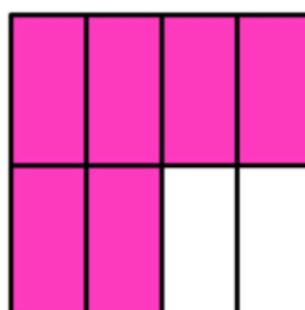
$$\frac{\quad}{\quad}$$



$$\frac{\quad}{\quad}$$



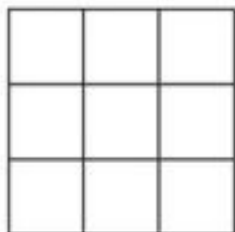
$$\frac{\quad}{\quad}$$



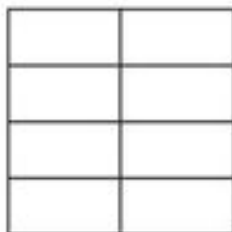
$$\frac{\quad}{\quad}$$

# LE FRAZIONI

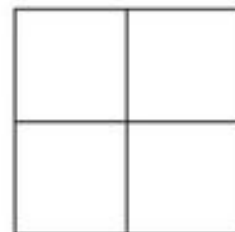
- Colora le parti delle figure geometriche corrispondenti alle frazioni date.



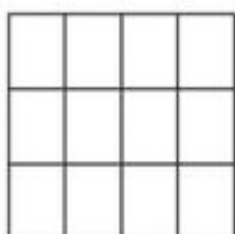
Colora  $\frac{5}{9}$




Colora  $\frac{6}{8}$



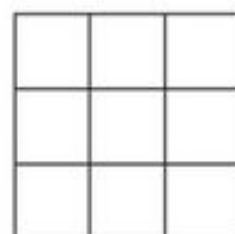
Colora  $\frac{2}{4}$



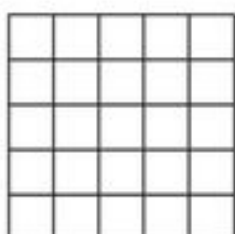
Colora  $\frac{8}{12}$



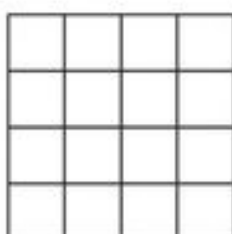
Colora  $\frac{1}{2}$



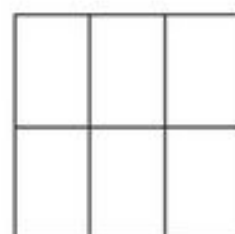
Colora  $\frac{3}{9}$



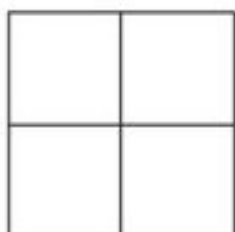
Colora  $\frac{16}{25}$




Colora  $\frac{10}{16}$



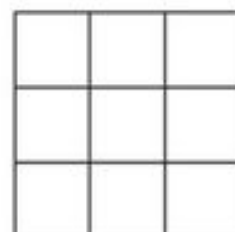
Colora  $\frac{4}{6}$



Colora  $\frac{1}{8}$



Colora  $\frac{8}{10}$

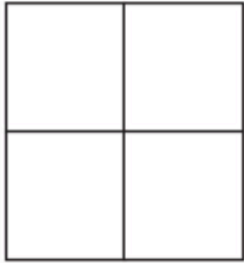


Colora  $\frac{4}{9}$

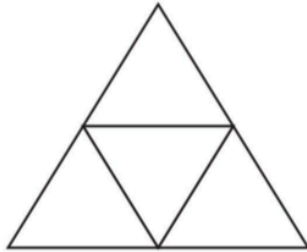
- Saper riconoscere e mettere in relazione frazioni e quantità.

# LE FRAZIONI

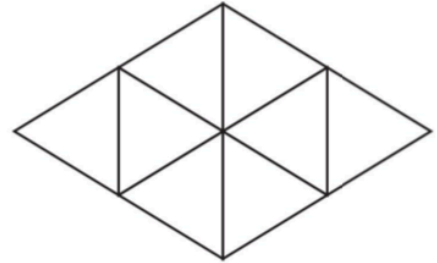
- Colora le parti delle figure geometriche corrispondenti alle frazioni date.



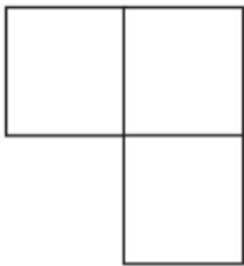
Colora  $\frac{1}{4}$



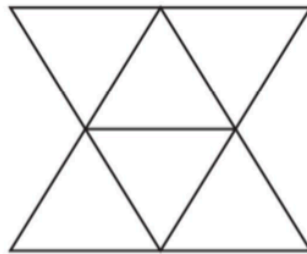
Colora  $\frac{1}{4}$



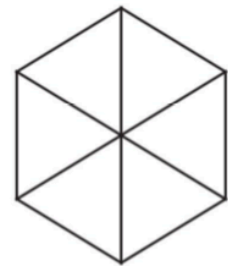
Colora  $\frac{7}{8}$



Colora  $\frac{1}{3}$



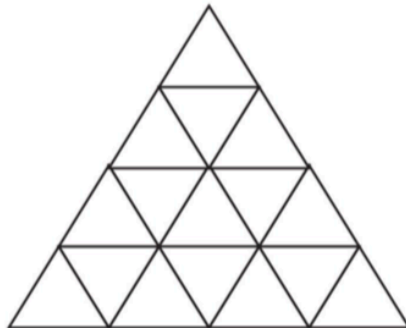
Colora  $\frac{3}{6}$



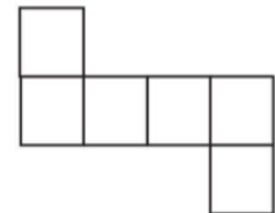
Colora  $\frac{1}{6}$



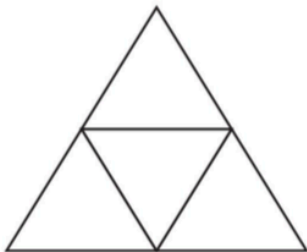
Colora  $\frac{5}{12}$



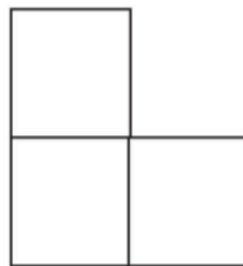
Colora  $\frac{9}{16}$



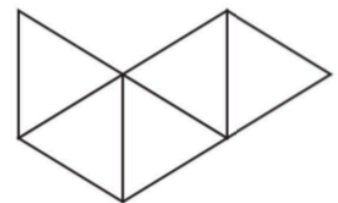
Colora  $\frac{2}{6}$



Colora  $\frac{3}{4}$



Colora  $\frac{2}{3}$

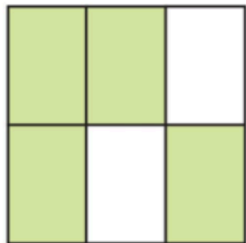


Colora  $\frac{4}{5}$

- Saper riconoscere e mettere in relazione frazioni e quantità.

# LE FRAZIONI

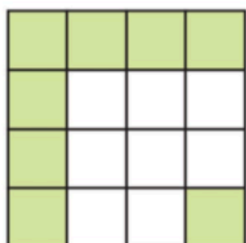
- Scrivi la frazione delle parti colorate e non colorate di ogni figura geometrica.



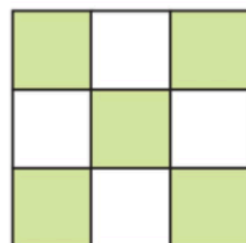
Parti colorate  Parti non colorate




Parti colorate  Parti non colorate



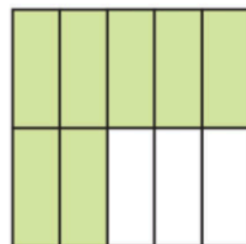
Parti colorate  Parti non colorate



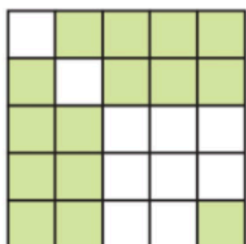
Parti colorate  Parti non colorate



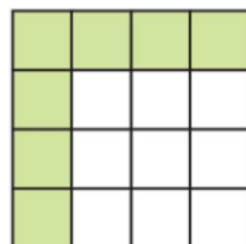
Parti colorate  Parti non colorate



Parti colorate  Parti non colorate



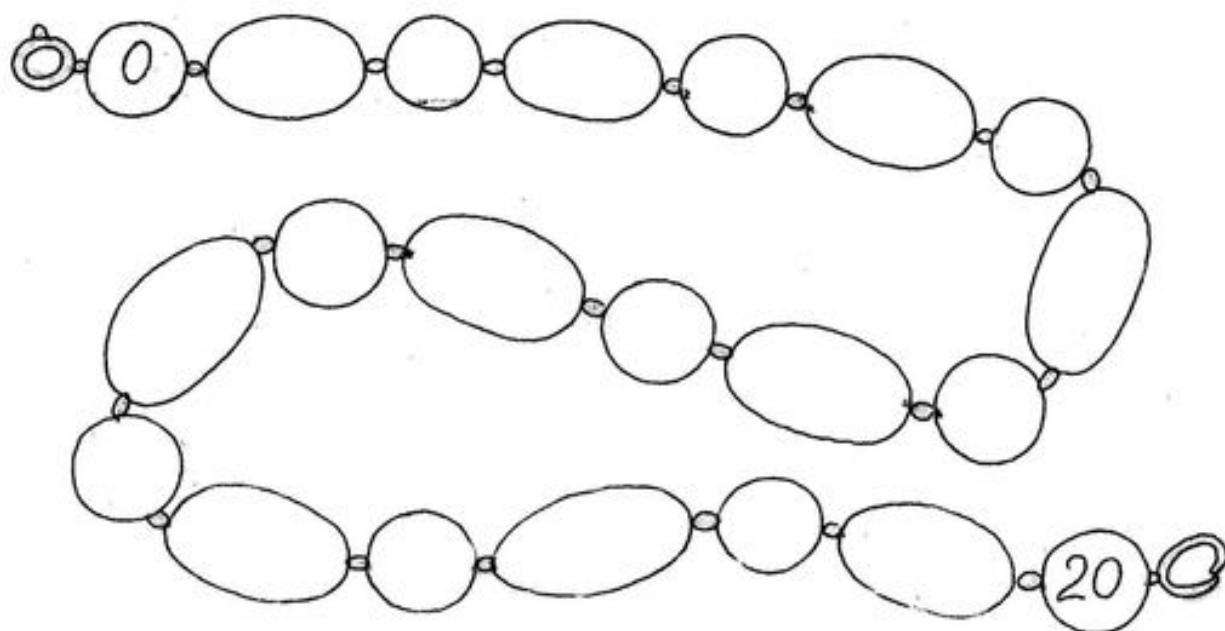
Parti colorate  Parti non colorate



Parti colorate  Parti non colorate

# NUMERI IN ORDINE

SCRIVI NELLE PERLE I NUMERI MANCANTI.



RICOPIA I NUMERI DI OGNI STRISCIA.

DAL MINORE AL MAGGIORE

|    |   |   |   |
|----|---|---|---|
| 11 | 3 | 7 | 9 |
|----|---|---|---|

|  |  |  |  |
|--|--|--|--|
|  |  |  |  |
|--|--|--|--|

|    |    |   |    |
|----|----|---|----|
| 13 | 20 | 8 | 15 |
|----|----|---|----|

|  |  |  |  |
|--|--|--|--|
|  |  |  |  |
|--|--|--|--|

|   |    |    |   |   |
|---|----|----|---|---|
| 7 | 13 | 19 | 2 | 4 |
|---|----|----|---|---|

|  |  |  |  |  |
|--|--|--|--|--|
|  |  |  |  |  |
|--|--|--|--|--|

|    |   |   |    |    |
|----|---|---|----|----|
| 17 | 6 | 0 | 10 | 12 |
|----|---|---|----|----|

|  |  |  |  |  |
|--|--|--|--|--|
|  |  |  |  |  |
|--|--|--|--|--|

DAL MAGGIORE AL MINORE

|    |    |   |    |
|----|----|---|----|
| 10 | 18 | 5 | 14 |
|----|----|---|----|

|  |  |  |  |
|--|--|--|--|
|  |  |  |  |
|--|--|--|--|

|    |   |   |    |
|----|---|---|----|
| 16 | 3 | 9 | 17 |
|----|---|---|----|

|  |  |  |  |
|--|--|--|--|
|  |  |  |  |
|--|--|--|--|

|    |   |    |    |   |
|----|---|----|----|---|
| 14 | 6 | 20 | 16 | 8 |
|----|---|----|----|---|

|  |  |  |  |  |
|--|--|--|--|--|
|  |  |  |  |  |
|--|--|--|--|--|

|   |    |    |   |    |
|---|----|----|---|----|
| 7 | 19 | 13 | 2 | 11 |
|---|----|----|---|----|

|  |  |  |  |  |
|--|--|--|--|--|
|  |  |  |  |  |
|--|--|--|--|--|

