

IL NUMERO 100

Scrivi il numero da aggiungere in modo che il risultato dell'addizione sia 100.

10 +

20 +

30 +

40 +

50 +

60 +

70 +

80 +

90 +



= 100



20

$13+4$

$7+12$

$11+9$

20

$5+15$

$16+5$

$18+1$

20

$12+6$

$3+17$

$11+5$

20

$2+18$

$6+16$

$17+1$

20


$9+13$

$15+3$


$12+8$

Il centinaio


- Colora le decine e le unità del primo numero e poi conta quante decine ed unità mancano per arrivare a 100 come mostrato nel primo esempio.




$$55 + 45 = 100$$




$$37 + \dots = 100$$




$$41 + \dots = 100$$




$$78 + \dots = 100$$




$$92 + \dots = 100$$




$$26 + \dots = 100$$



$$66 + \dots = 100$$



$$83 + \dots = 100$$



$$11 + \dots = 100$$